

PACK	LEVEL	WEEK
4	C	1

Step-by-step examples at:
gregtangmath.com/tutorials

WORDY WEDNESDAY

Pack 4

Riddle Puzzles • Fill-in-the-Blank • Who Am I? • Split Decision • More or Less



Name: _____

RIDDLE PUZZLES

PACK	LEVEL	WEEK
4	C	1

Use number names to solve the riddle!

Step-by-step examples at:
gregtangmath.com/tutorials

What ocean animal can be yellow, red, or blue?

_____ o _____ 1 2 3 4

1. Sage had some tacks. Gia gave her 19 more tacks. Now Sage has 56 tacks. How many tacks did Sage have at first?

_____ What is the **seventh** letter in your answer?
1

2. Luke picked some mangos. He gave 10 mangos to Sue. Now Luke has 9 mangos. How many mangos did Luke pick?

_____ What is the **fifth** letter in your answer?
2

3. Tom picked some kiwis. He gave 32 kiwis to Faith. Now Tom has 39 kiwis. How many kiwis did Tom pick?

_____ What is the **second** letter in your answer?
3

4. Zane had some erasers. TJ gave him 33 more erasers. Now Zane has 69 erasers. How many erasers did Zane have at first?

_____ What is the **fourth** letter in your answer?
4

Name: _____

WHO AM I?

Use the clue to figure out the answer.
Then write your answer in the box.

PACK	LEVEL	WEEK
4	C	1

Step-by-step examples at:
gregtangmath.com/tutorials

I have 5 hundreds, 2 more tens than hundreds, and 4 fewer ones than tens.
Who am I?

I am an even number. I am greater than the value of 6 dimes. I am less than 2 rows of 32.
What number am I?

SPLIT DECISION

Choose the correct answer for each question below.

Which is more money?

___ 5 dimes, 1 nickel, and
6 pennies

___ 2 quarters, 1 dime, and
2 pennies

Which class has the shorter recess?

___ Mr. Jabob's class starts recess
at 8:25 and ends at 8:41.

___ Mrs. Malm's class starts at
8:18 and ends at 8:35.

Name: _____

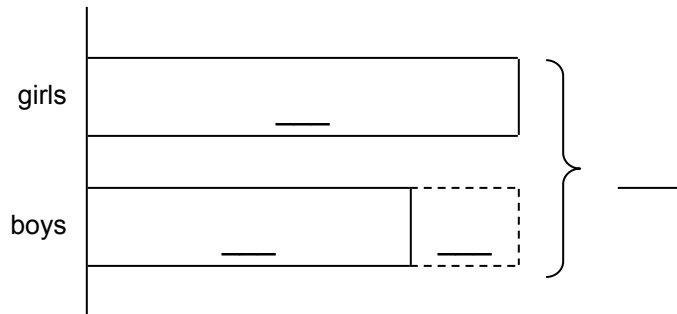
FILL IN THE BLANK

PACK	LEVEL	WEEK
4	C	1

Use the numbers from the bank to label the bars and fill in the blanks.

Step-by-step examples at: gregtangmath.com/tutorials

2 6 8 14

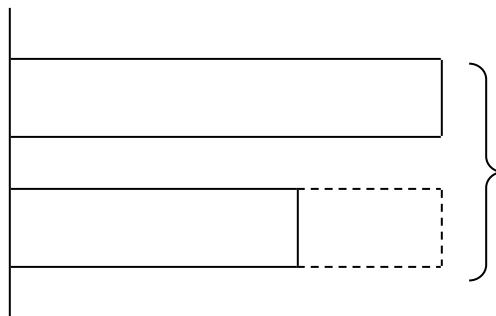


There are ___ girls and ___ boys on the soccer team.

There are ___ students on the team all together.

There are ___ more girls than boys on the team.

3 6 9 15



Diana drew ___ circles and ___ triangles in her notebook.

She drew ___ shapes in all.

Diana drew ___ fewer triangles than circles.

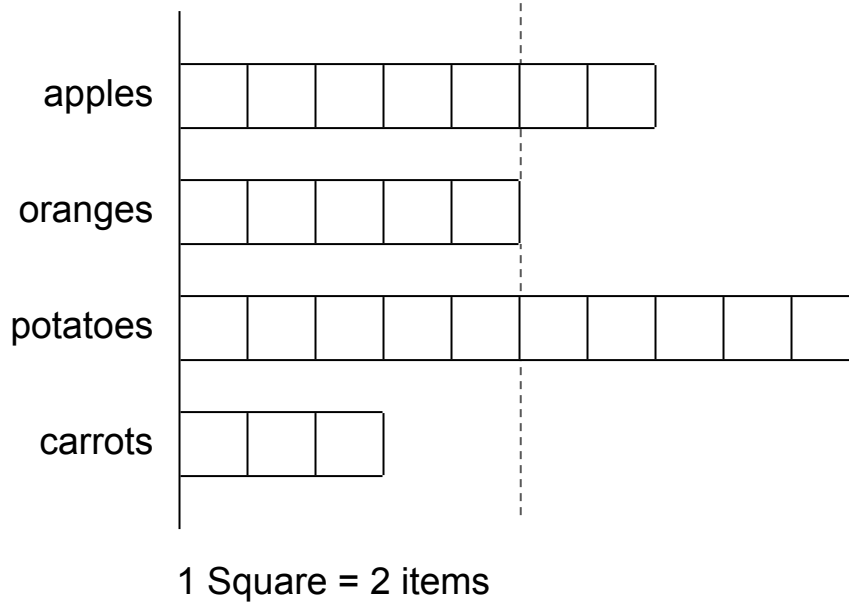
Name: _____

MORE OR LESS

PACK	LEVEL	WEEK
4	C	1

Use the bar chart to answer the questions.

Step-by-step examples at:
gregtangmath.com/tutorials



14

1. How many apples?

2. How many more potatoes than apples?

3. How many more vegetables than fruits?

4. How many fruits and vegetables in all?