

PACK	LEVEL	WEEK
4	B	1

Step-by-step examples at:
gregtangmath.com/tutorials

WORDY WEDNESDAY

Pack 4

Riddle Puzzles • Fill-in-the-Blank • Who Am I? • Split Decision • More or Less



Name: _____

RIDDLE PUZZLES

PACK	LEVEL	WEEK
4	B	1

Use number names to solve the riddle!

Step-by-step examples at:
gregtangmath.com/tutorials

What shape has 3 sides?

1 2 3 a 4 g l e

1. Paige has 12 fish. Dawn has 4 fish. How many more fish does Paige have than Dawn?

_____ What is the **fifth** letter in your answer? 1

2. Levi has 10 cookies. TJ has 6 cookies. How many fewer cookies does TJ have than Levi?

_____ What is the **fourth** letter in your answer? 2

3. Ty has 9 balls. Mia has 3 balls. How many fewer balls does Mia have than Ty?

_____ What is the **second** letter in your answer? 3

4. Ada has 11 lemons. Jude has 4 lemons. How many more lemons does Ada have than Jude?

_____ What is the **fifth** letter in your answer? 4

Name: _____

WHO AM I?

Use the clue to figure out the answer.
Then write your answer in the box.

PACK	LEVEL	WEEK
4	B	1

Step-by-step examples at:
gregtangmath.com/tutorials

I am between 35 and 45. I have 3 ones.
What number am I?

I am less than 15. My name starts with the
letter "t". I have 6 letters in my name.
Who am I?

SPLIT DECISION

Choose the correct answer for each question below.

Which is more money?

___ 1 dime and 2 pennies

___ 1 nickel and 8 pennies

Who ended up with fewer tickets?

___ JJ earned 24 tickets. He gave
away 5 tickets.

___ Carl earned 9 tickets in the
morning. He earned 9 tickets in
the afternoon.

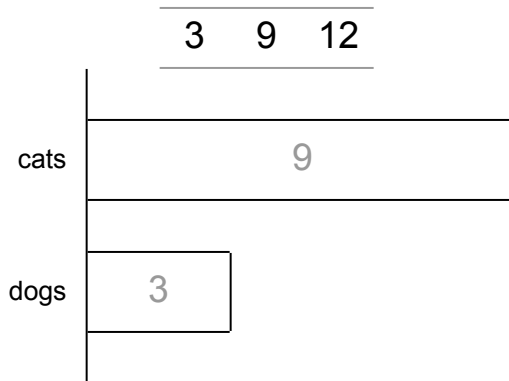
Name: _____

FILL IN THE BLANK

Use the numbers from the number bank to label the bars and fill in the blanks.

PACK	LEVEL	WEEK
4	B	1

Step-by-step examples at:
gregtangmath.com/tutorials

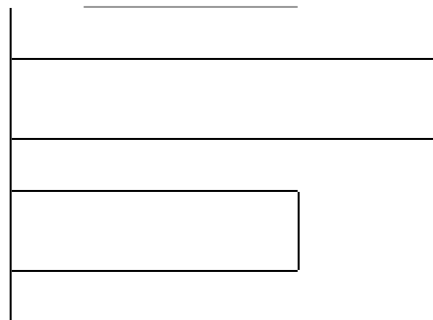


Jan has ___ pets. ___ are cats and ___ are dogs.

Jan has more cats than dogs.

Number bank:

2 3 5



Together, Kay and Leo have ___ pencils.

Kay has ___ pencils and Leo has ___ pencils.

Kay has more pencils than Leo.

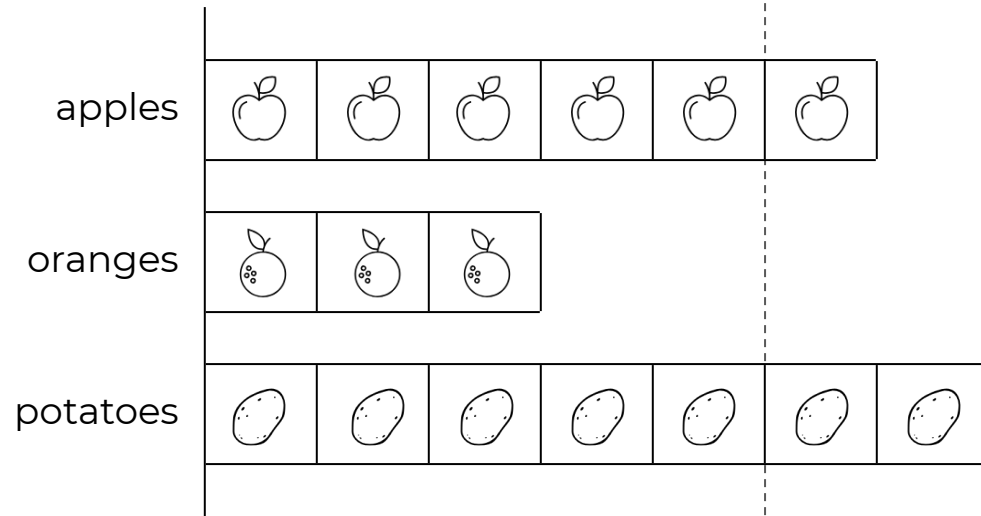
Name: _____

MORE OR LESS

PACK	LEVEL	WEEK
4	B	1

Use the bar chart to answer the questions.

Step-by-step examples at:
gregtangmath.com/tutorials



- _____ 1. Are there fewer potatoes or oranges?
- _____ 2. How many fewer?
- _____ 3. How many fruits and vegetables in all?
- _____ 4. Are there more potatoes or fruits?
- _____ 5. How many more?