

PACK	LEVEL	WEEK
4	A	1

Step-by-step examples at:
gregtangmath.com/tutorials

WORDY WEDNESDAY

Pack 4

Riddle Puzzles • Fill-in-the-Blank • Who Am I? • Split Decision • More or Less



Name: _____

RIDDLE PUZZLES

PACK	LEVEL	WEEK
4	A	1

Use number names to solve the riddle!

Step-by-step examples at:
gregtangmath.com/tutorials

What animal has a shell?

1 u 2 3 l 4

1. Lucy had 5 books. Stella gave her 5 books. How many books does Lucy have now?

_____ What is the **first** letter in your answer? 1

2. Drew had 8 plums. He ate 5 plums. How many plums does Drew have now?

_____ What is the **third** letter in your answer? 2

3. Frank had 6 limes. He ate 4 limes. How many limes does Frank have now?

_____ What is the **first** letter in your answer? 3

4. Tate had 3 toy cars. Liz gave him 6 toy cars. How many toy cars does Tate have now?

_____ What is the **fourth** letter in your answer? 4

Name: _____

WHO AM I?

Use the clue to figure out the answer.
Then write your answer in the box.

PACK	LEVEL	WEEK
4	A	1

Step-by-step examples at:
gregtangmath.com/tutorials

I am less than 10. My name begins with the letter "n". What number am I?

I am the number of legs on 1 cow and 1 chicken. Who am I?

SPLIT DECISION

Choose the correct answer for each question below.

Who has more crayons?

____ John has 7 blue crayons and 2 green crayons.

____ Jill has 6 blue crayons and 4 green crayons.

Which family has fewer pets?

____ The Millers have 3 dogs and 1 cat.

____ The Clarks have 2 dogs and 4 cats.

Name: _____

FILL IN THE BLANK

Use the numbers from the number bank to fill in the blanks.

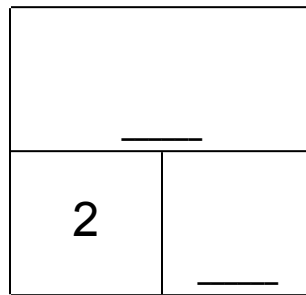
PACK	LEVEL	WEEK
4	A	1

Step-by-step examples at:
gregtangmath.com/tutorials

Number bank:

1 3

Total



Start

More

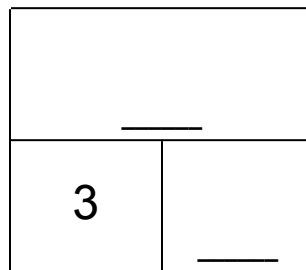
There were 2 bugs on the leaf. ____ more bug crawled onto the leaf.

Now there are ____ bugs on the leaf.

Number bank:

5 2

Total



Start

More

Jan had 3 stars. The teacher gave her ____ more stars.

Now Jan has ____ stars.

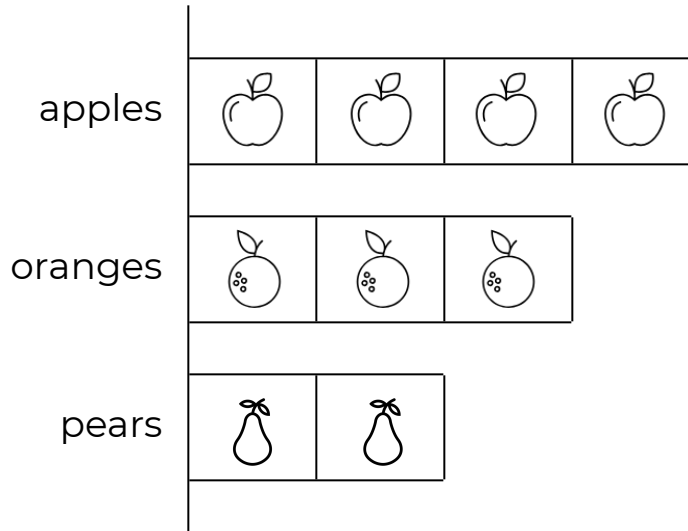
Name: _____

MORE or LESS

PACK	LEVEL	WEEK
4	A	1

Use the bar chart to answer the questions.

Step-by-step examples at:
gregtangmath.com/tutorials



- _____ 1. Are there more apples or oranges?
- _____ 2. How many more?
- _____ 3. Are there fewer pears or apples?
- _____ 4. How many fewer?
- _____ 5. How many fruits in all?